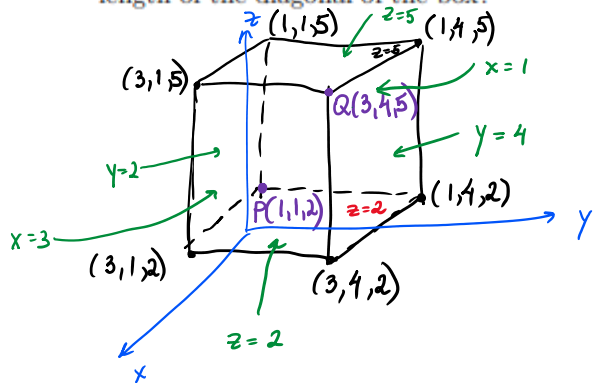


1. Draw a rectangular box that has the points  $P(1, 1, 2)$  and  $Q(3, 4, 5)$  as opposite vertices and has its faces parallel to the coordinate planes. Find the coordinates of the other six vertices of the box. What is the length of the diagonal of the box?



$$|PQ| = \sqrt{(3-1)^2 + (4-1)^2 + (5-2)^2} = \sqrt{2^2 + 3^2 + 3^2} = \sqrt{22}$$

a sphere center @  $(a, b, c)$  of radius  $R$   
$$(x-a)^2 + (y-b)^2 + (z-c)^2 = R$$

2. Find the center and radius of the sphere  $x^2 + y^2 + z^2 + 4x + 6y - 10z + 2 = 0$

$$(x^2 + 4x + 4) + (y^2 + 6y + 9) + (z^2 - 10z + 25) + 2 = 0 + 4 + 9 + 25$$

$$(x+2)^2 + (y+3)^2 + (z-5)^2 = 36$$

center @  $(-2, -3, 5)$ , radius is 6

3. Find an equation of the sphere given that it touches the  $yz$ -plane and has the center at  $(2, 1, 3)$ .

$r =$  distance from  $(2, 1, 3)$  to the  $yz$ -plane.



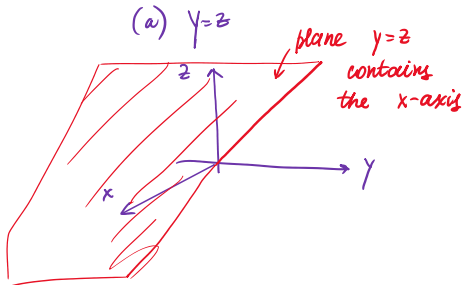
$$r = 2$$

Eqn.  $(x-2)^2 + (y-1)^2 + (z-3)^2 = 2^2$  or

$$(x-2)^2 + (y-1)^2 + (z-3)^2 = 4$$

4. Describe in words the region of  $\mathbb{R}^3$  represented by the equation or inequality.

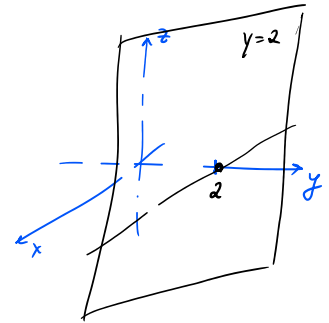
- (a)  $y = z$
- (b)  $y > 2$
- (c)  $y^2 + z^2 \leq 4$
- (d)  $x^2 + y^2 + z^2 - 2z < 3$



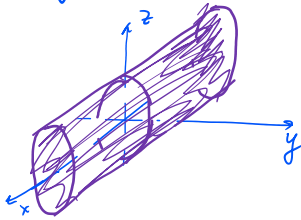
(b)  $y > 2$

$y = 2$  is a vertical plane perpendicular to the  $y$ -axis parallel to the  $xz$ -plane passes through  $(0, 2, 0)$

$y > 2$  consists of points in  $\mathbb{R}^3$  that lie to the right from the plane  $y = 2$ .  
The plane is not included

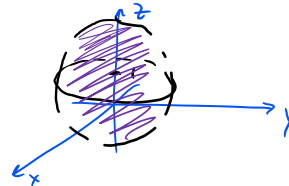


(c)  $[y^2 + z^2 \leq 4]$  ← points inside the cylinder + the cylinder  
a cylinder of radius 2  $| y^2 + z^2 = 4$   
along the  $x$ -axis



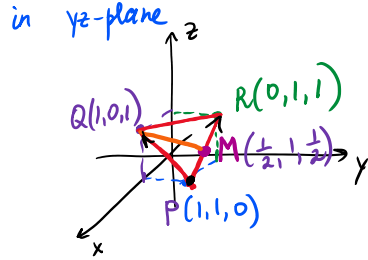
(d)  $x^2 + y^2 + z^2 - 2z < 3$

$x^2 + y^2 + (z^2 - 2z + 1) = 3 + 1$   
 $x^2 + y^2 + (z - 1)^2 = 4$   
sphere with center  $(0, 0, 1)$   
of radius 2



$x^2 + y^2 + (z - 1)^2 < 4$   
consists of points inside the sphere, the sphere is not included.

5. Find the lengths of the sides and the medians of the triangle with the vertices  $P(1, 1, 0)$ ,  $Q(1, 0, 1)$ , and  $R(0, 1, 1)$ . Find the area of the triangle  $PQR$ .



in  $xy$ -plane  
lies in the  $xz$ -plane

$$\left. \begin{aligned} |QR| &= \sqrt{(0-1)^2 + (1-0)^2 + (1-1)^2} = \sqrt{1^2 + 1^2} = \sqrt{2} \\ |PQ| &= \sqrt{(1-1)^2 + (1-0)^2 + (0-1)^2} = \sqrt{1^2 + 1^2} = \sqrt{2} \\ |PR| &= \sqrt{(0-1)^2 + (1-1)^2 + (1-0)^2} = \sqrt{1^2 + 1^2} = \sqrt{2} \end{aligned} \right\} \text{sides.}$$

$M$  is the midpoint for  $PR$ .

$$M\left(\frac{1+0}{2}, \frac{1+1}{2}, \frac{0+1}{2}\right) \text{ or } M\left(\frac{1}{2}, 1, \frac{1}{2}\right)$$

Median  $|QM| = \sqrt{\left(\frac{1}{2}-1\right)^2 + (1-0)^2 + \left(\frac{1}{2}-1\right)^2} = \sqrt{\frac{1}{4} + 1 + \frac{1}{4}} = \sqrt{\frac{3}{2}}$

Area  $A = \frac{1}{2} |\vec{PQ} \times \vec{PR}|$

$$\vec{PQ} = \langle 1-1, 0-1, 1-0 \rangle = \langle 0, -1, 1 \rangle$$

$$\vec{PR} = \langle 0-1, 1-1, 1-0 \rangle = \langle -1, 0, 1 \rangle$$

$$\begin{aligned} \vec{PQ} \times \vec{PR} &= \begin{vmatrix} \vec{i} & \vec{j} & \vec{k} \\ 0 & -1 & 1 \\ -1 & 0 & 1 \end{vmatrix} = \vec{i} \begin{vmatrix} -1 & 1 \\ 0 & 1 \end{vmatrix} - \vec{j} \begin{vmatrix} 0 & 1 \\ -1 & 1 \end{vmatrix} + \vec{k} \begin{vmatrix} 0 & -1 \\ -1 & 0 \end{vmatrix} \\ &= \vec{i}(-1+0) - \vec{j}(0-(-1)) + \vec{k}(0-1) \\ &= -\vec{i} - \vec{j} - \vec{k} \end{aligned}$$

$$A = \frac{1}{2} |\vec{PQ} \times \vec{PR}| = \frac{1}{2} \sqrt{(-1)^2 + (-1)^2 + (-1)^2} = \boxed{\frac{\sqrt{3}}{2}}$$

$$\vec{b} = \langle 0, 3, -5 \rangle$$

6. If  $\mathbf{a} = \mathbf{i} + 2\mathbf{j} - \mathbf{k}$  and  $\mathbf{b} = 3\mathbf{j} - 5\mathbf{k}$ , find:

- (a) A unit vector in the direction of  $\mathbf{a}$ .
- (b) A vector in the direction of  $\mathbf{a} + \mathbf{b}$  with length 4.

(a)  $\vec{a} = \langle 1, 2, -1 \rangle$

$$|\vec{a}| = \sqrt{1^2 + 2^2 + (-1)^2} = \sqrt{6}$$

unit  
vector

$$\vec{u} = \frac{\vec{a}}{|\vec{a}|} = \frac{\langle 1, 2, -1 \rangle}{\sqrt{6}} = \frac{1}{\sqrt{6}} \langle 1, 2, -1 \rangle = \left\langle \frac{1}{\sqrt{6}}, \frac{2}{\sqrt{6}}, -\frac{1}{\sqrt{6}} \right\rangle$$

(b)  $\vec{a} + \vec{b} = \langle 1, 2, -1 \rangle + \langle 0, 3, -5 \rangle = \langle 1, 5, -6 \rangle$ ,  $|\vec{a} + \vec{b}| = \sqrt{1^2 + 5^2 + (-6)^2} = \sqrt{1 + 25 + 36} = \sqrt{62}$   
a unit vector in the direction of  $\vec{a} + \vec{b}$  is  $\vec{u} = \frac{\vec{a} + \vec{b}}{|\vec{a} + \vec{b}|} = \frac{\langle 1, 5, -6 \rangle}{\sqrt{62}}$

a vector of length 4 in the direction of  $\vec{a} + \vec{b}$  is  $4\vec{u} = \frac{4}{\sqrt{62}} \langle 1, 5, -6 \rangle$

$$\vec{F} = \langle 3, 2, -1 \rangle, |\vec{F}| = \sqrt{3^2 + 2^2 + (-1)^2} = \sqrt{14}$$

7. A constant force of  $\mathbf{F} = 3\mathbf{i} + 2\mathbf{j} - \mathbf{k}$  moves an object along the line segment from  $(1, 0, 2)$  to  $(3, 4, 5)$ . Find the work done. What is an angle between the force and the displacement vector?

$$W = \vec{F} \cdot \vec{D}$$

$\vec{D}$  is the displacement vector.

$$\vec{D} = \langle 3-1, 4-0, 5-2 \rangle = \langle 2, 4, 3 \rangle; |\vec{D}| = \sqrt{2^2 + 4^2 + 3^2} = \sqrt{4+16+9} = \sqrt{29}$$

$$W = \langle 3, 2, -1 \rangle \cdot \langle 2, 4, 3 \rangle = 3(2) + 2(4) - 1(3) = 11$$

an angle  $\cos \theta = \frac{\vec{F} \cdot \vec{D}}{|\vec{F}| \cdot |\vec{D}|} = \frac{11}{\sqrt{14} \cdot \sqrt{29}}$

$$\theta = \arccos\left(\frac{11}{\sqrt{14}\sqrt{29}}\right) \approx 57 \text{ (rad)}$$

8. What restrictions must be made on  $b$  so that the vector  $2\mathbf{i} + b\mathbf{j}$  is orthogonal to vector  $-3\mathbf{i} + 2\mathbf{j} + \mathbf{k}$  to the vector  $\mathbf{k}$ ?

Find  $b$  such that  $\vec{p} \cdot \vec{q} = \langle 2, b, 0 \rangle \cdot \langle -3, 2, 1 \rangle = 0$

$$-6 + 2b + 0 = 0$$

$$2b = +6 \Rightarrow \boxed{b = +3}$$

$\vec{p} = \langle 2, b, 0 \rangle$  and  $\vec{k} = \langle 0, 0, 1 \rangle$  — orthogonal for all  $b$ .  
 $\vec{p}$  lies in the  $(xy)$  plane  
 $\vec{k}$  is perpendicular to all vectors in  $(xy)$  plane.



9. Find the scalar and vector projections of  $\vec{n} = \langle 4, 2, 0 \rangle$  onto  $\vec{m} = \langle 1, 2, 3 \rangle$ .

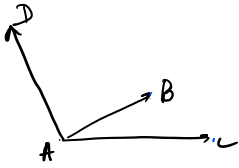
scalar

$$\text{comp}_{\vec{m}} \vec{n} = \frac{\vec{n} \cdot \vec{m}}{|\vec{m}|} = \frac{\langle 4, 2, 0 \rangle \cdot \langle 1, 2, 3 \rangle}{\sqrt{1^2 + 2^2 + 3^2}} = \frac{4+4}{\sqrt{14}} = \boxed{\frac{8}{\sqrt{14}}}$$

vector

$$\text{proj}_{\vec{m}} \vec{n} = \frac{\vec{n} \cdot \vec{m}}{|\vec{m}|^2} \vec{m} = \frac{8}{14} \langle 1, 2, 3 \rangle = \boxed{\frac{4}{7} \langle 1, 2, 3 \rangle}$$

10. Given the points  $A(1,0,1)$ ,  $B(2,3,0)$ ,  $C(-1,1,4)$ , and  $D(0,3,2)$ . Find the volume of the parallelepiped with adjacent edges  $\vec{AB}$ ,  $\vec{AC}$ , and  $\vec{AD}$ .



$$V = |\vec{AB} \cdot (\vec{AC} \times \vec{AD})|$$

the absolute value of the scalar triple product.

$$\vec{AB} = \langle 2-1, 3-0, 0-1 \rangle \quad \left\{ \begin{array}{l} \vec{AC} = \langle -1-1, 1-0, 4-1 \rangle \\ \vec{AD} = \langle 0-1, 3-0, 2-1 \rangle \end{array} \right.$$

$$\vec{AB} = \langle 1, 3, -1 \rangle \quad \left\{ \begin{array}{l} \vec{AC} = \langle -2, 1, 3 \rangle \\ \vec{AD} = \langle -1, 3, 1 \rangle \end{array} \right.$$

$$\vec{AB} \cdot (\vec{AC} \times \vec{AD}) = \begin{vmatrix} 1 & 3 & -1 \\ -2 & 1 & 3 \\ -1 & 3 & 1 \end{vmatrix} = 1 - 9 + 6 - 1 - 9 + 6 = -18 + 12 = -6$$

$$V = |-6| = \boxed{6}$$